






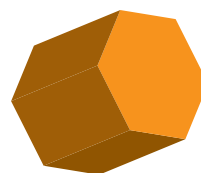









が つ に ち



数を数えて、その数字を書く練習です。積み木はそれぞれ傾きが違っているので、見え方が違っていても同じ形であることを理解させてください。難しいようでしたら色で判断してもかまいません。


おなじ かたちの つみきは いくつ あるかな？
かぞえて □ に すうじを かいてね。



みほん


1 2 3 4 5

◀ なぞっても いいよ。



□

〽



□

〽



□

〽



□

〽